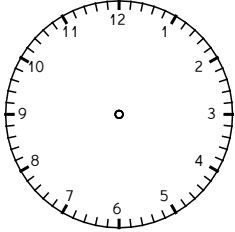
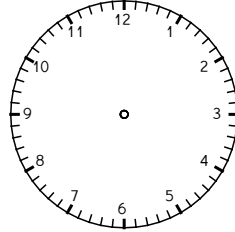


# Tell the Time Worksheet



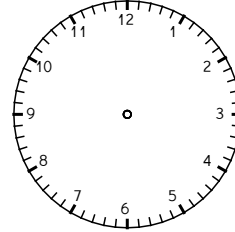
Analog time : \_\_\_\_\_

Digital time : \_\_\_\_\_



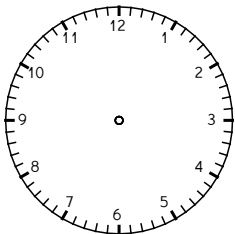
Analog time : \_\_\_\_\_

Digital time : \_\_\_\_\_



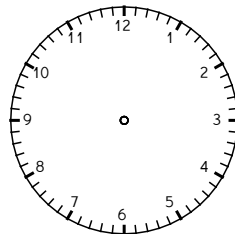
Analog time : \_\_\_\_\_

Digital time : \_\_\_\_\_



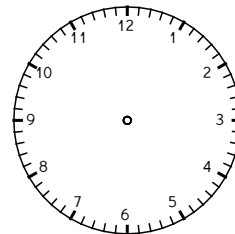
Analog time : \_\_\_\_\_

Digital time : \_\_\_\_\_



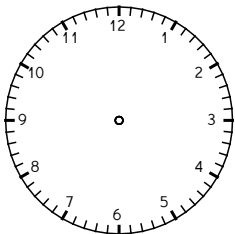
Analog time : \_\_\_\_\_

Digital time : \_\_\_\_\_



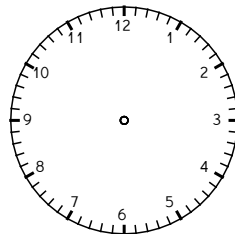
Analog time : \_\_\_\_\_

Digital time : \_\_\_\_\_



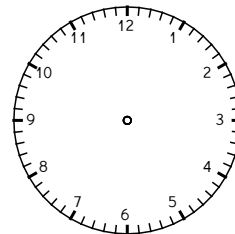
Analog time : \_\_\_\_\_

Digital time : \_\_\_\_\_



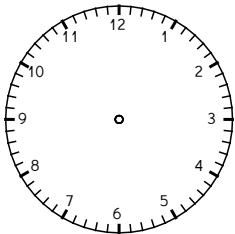
Analog time : \_\_\_\_\_

Digital time : \_\_\_\_\_



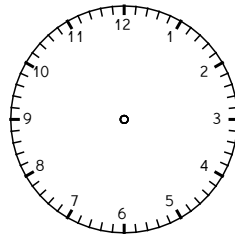
Analog time : \_\_\_\_\_

Digital time : \_\_\_\_\_



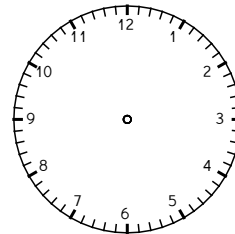
Analog time : \_\_\_\_\_

Digital time : \_\_\_\_\_



Analog time : \_\_\_\_\_

Digital time : \_\_\_\_\_



Analog time : \_\_\_\_\_

Digital time : \_\_\_\_\_